

Aquatic and Terrestrial Organisms on the Food Chain


Name _____

Observe the environment through the video camera on-line.

Write an animal's name or draw an animal's picture in each box that matches the label.

Explain why you gave each that label.

Aquatic Organisms




Label producer

Why? _____



Label consumer

Why? _____



Label decomposer


Why? _____

Observe the environment through the video camera on-line.

Write an animal's name or draw an animal's picture in each box that matches the label.

Explain why you gave each that label.

Terrestrial Organism




Label producer

Why? _____



Label consumer

Why? _____



Label decomposer

Why? _____

